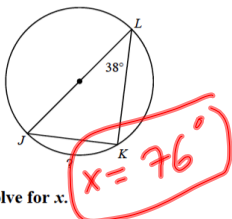


Practice 11.3

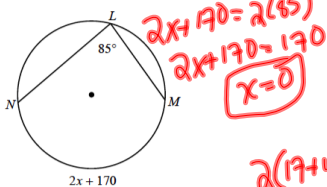
Find the measure of the arc or angle indicated.

1)

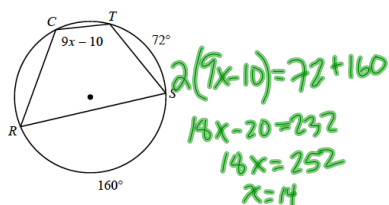


Solve for x.

3)

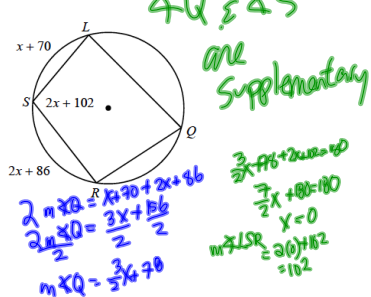


5)

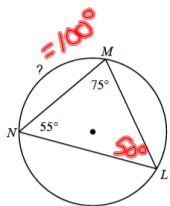


Find the measure of the arc or angle indicated.

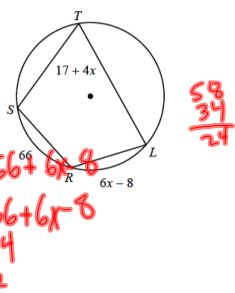
7) Find $m\angle LSR$



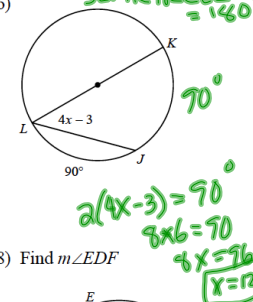
2)



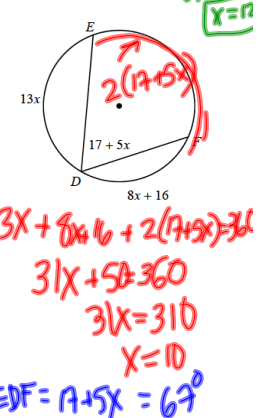
4)



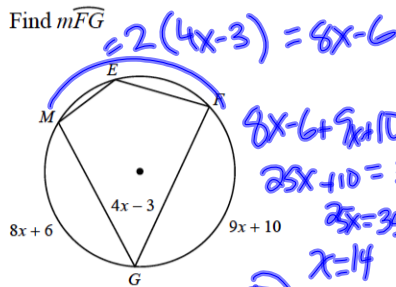
6)



8) Find $m\angle EDF$

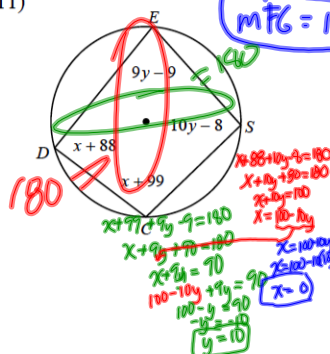


9) Find $m\widehat{FG}$

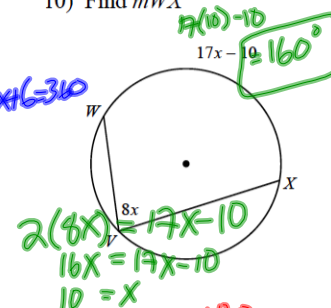


Solve for x and y.

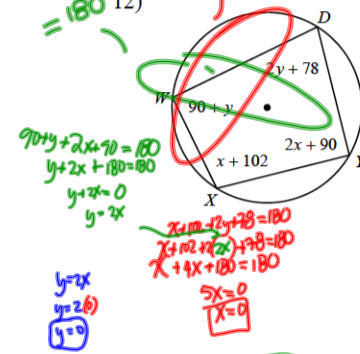
11)



10) Find $m\widehat{WX}$



12)

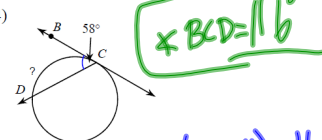


Find the measure of the arc or angle indicated. Assume that lines which appear tangent are tangent.

13)

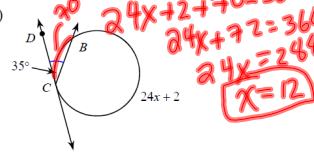


14)



Solve for x. Assume that lines which appear tangent are tangent.

15)



16)

