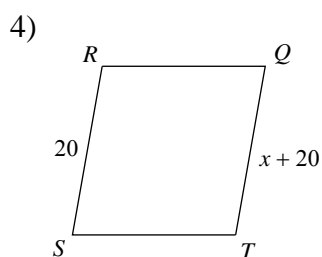
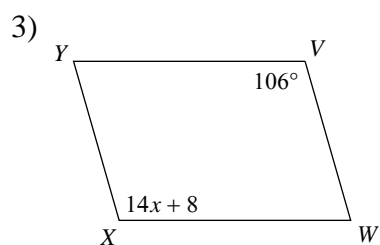
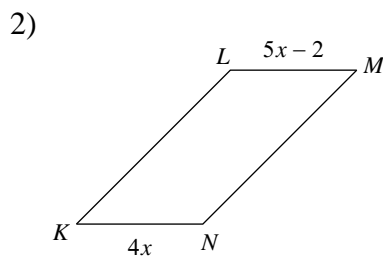
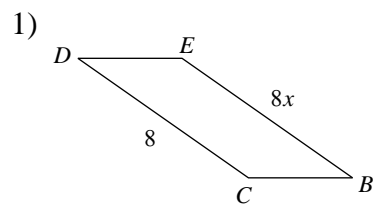
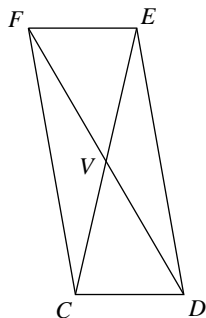


© 2012 Kuta Software LLC. All rights reserved.

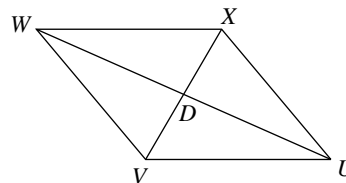
Solve for  $x$ . Each figure is a parallelogram.



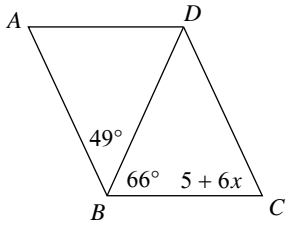
5)  $EV = 15$   
 $VC = 2x - 1$



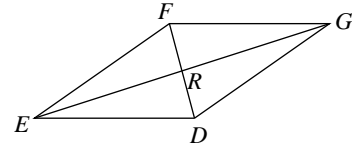
6)  $VD = 24$   
 $DX = 4x + 4$



7)

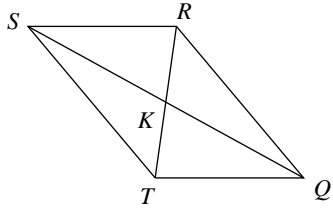


8)  $RG = 22$   
 $EG = 15x - 1$

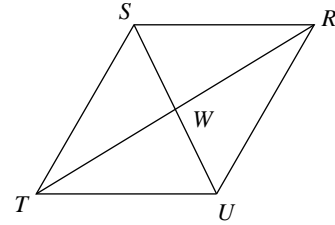


**Find the measurement indicated in each parallelogram.**

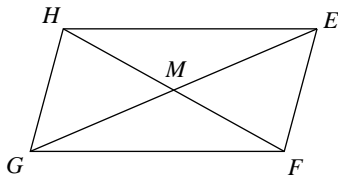
9)  $SK = 3x - 1$   
 $KQ = 2x + 6$   
 Find  $SK$



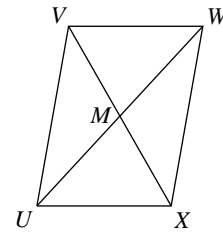
10)  $TW = 3x + 2$   
 $WR = 4x - 1$   
 Find  $TW$



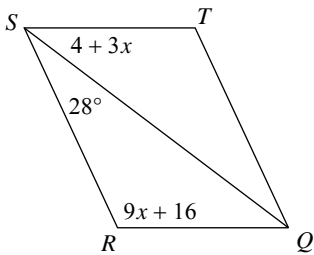
11)  $FM = 2x + 6$   
 $MH = 3x - 1$   
 Find  $FM$



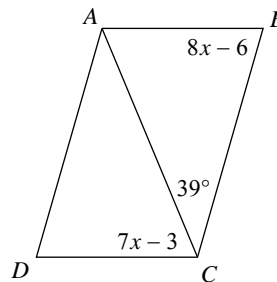
12)  $VM = x + 6$   
 $MX = -1 + 2x$   
 Find  $VM$



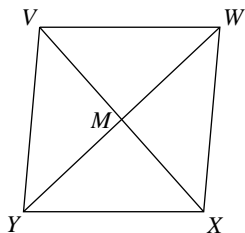
13) Find  $m\angle RQT$



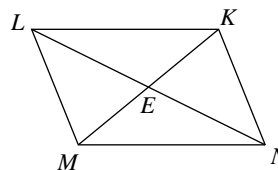
14) Find  $m\angle D$



- 15)  $WM = 3x$   
 $MY = 2x + 4$   
Find  $WY$



- 16)  $ME = 3x + 3$   
 $EK = 2x + 9$   
Find  $MK$



Answers to 5.2      Corrective Assignment #2

- 1) 1
- 5) 8
- 9) 20
- 13)  $65^\circ$

- 2) 2
- 6) 5
- 10) 11
- 14)  $74^\circ$

- 3) 7
- 7) 10
- 11) 20
- 15) 24

- 4) 0
- 8) 3
- 12) 13
- 16) 42