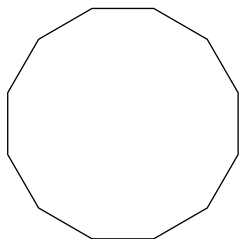


Practice 5.1

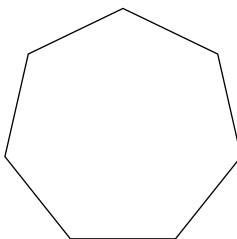
© 2012 Kuta Software LLC. All rights reserved.

Find the interior angle sum for each polygon. Round your answer to the nearest tenth if necessary.

1)



2)

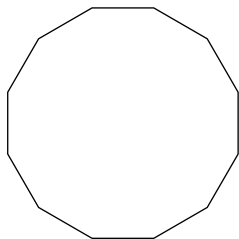


3) regular 19-gon

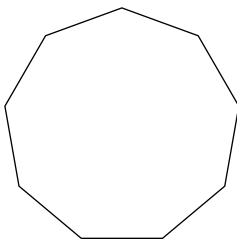
4) regular 14-gon

Find the measure of one exterior angle in each regular polygon. Round your answer to the nearest tenth if necessary.

5)



6)



7) regular octagon


8) regular 15-gon

9) regular 11-gon

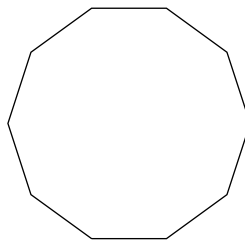
10) regular pentagon

Find the measure of one interior angle in each regular polygon. Round your answer to the nearest tenth if necessary.

11)



12)



13) regular 14-gon

14) regular 24-gon

15) regular 20-gon

16) regular 17-gon

Answers to Practice 5.1

1) 1800°

2) 900°

3) 3060°

4) 2160°

5) 30°

6) 40°

7) 45°

8) 24°

9) 32.7°

10) 72°

11) 90°

12) 144°

13) 154.3°

14) 165°

15) 162°

16) 158.8°